


HANGİ ŞEKİL?


Her bir tabloda istenilen sayıda olan şekil kutularını **boyayın**.




Hangi şekilden 5 tane var?



Hangi şekilden 3 tane var?




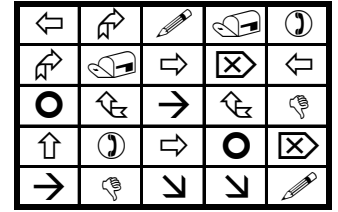
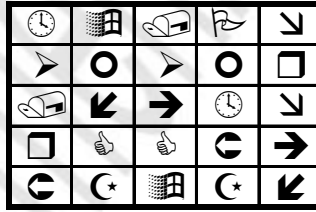
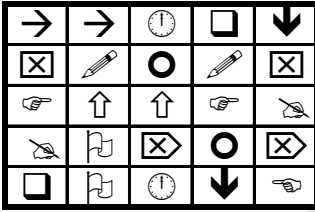


Hangi şekilden 5 tane var?



EŞİ OLMAYANI BUL

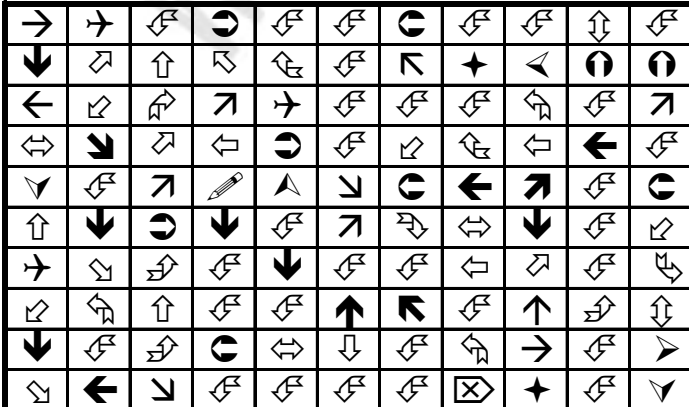
Her tabloda bir şeklin eşi yok. Eşi olmayan şekilleri işaretle.



ŞEKİLLERİ SAYALIM

Aşağıdaki şekillerin kaç tane olduğunu noktalı yere yazın.

↖ = ↗ =



Aşağıdaki şekillerin kaç tane olduğunu noktalı yere yazın.

↑ = ↖ =

